

Trig: Angles on Coordinate Plane

Name:

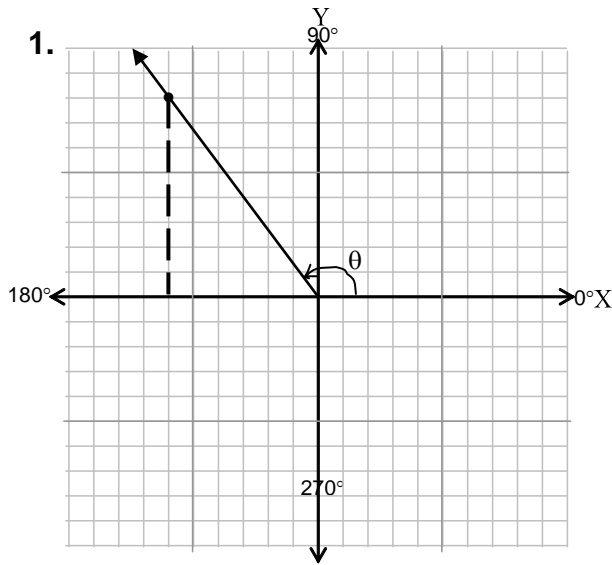
Date:

Per.

Graph the point. Draw the **terminal side** of angle θ containing the given point in standard position.

Draw a small arc to show the rotation from the **initial side** (positive x-axis) to the **terminal side**.

Draw reference triangle on the x-axis. Find values of $\sin\theta$, $\cos\theta$, $\tan\theta$, and the degree measure of angle θ .



$(-6, 8)$

$$x^2 + y^2 = r^2$$

$$(-6)^2 + 8^2 = r^2$$

$$36 + 64 = r^2$$

$$100 = r^2$$

$$r = \sqrt{100} \Rightarrow r = 10 \quad \text{r is always positive}$$

$$\sin\theta = \frac{y}{r}$$

$$\sin\theta = \frac{8}{10}$$

$$\sin\theta = \frac{4}{5}$$

$$\cos\theta = \frac{x}{r}$$

$$\cos\theta = \frac{-6}{10}$$

$$\cos\theta = \frac{-3}{5}$$

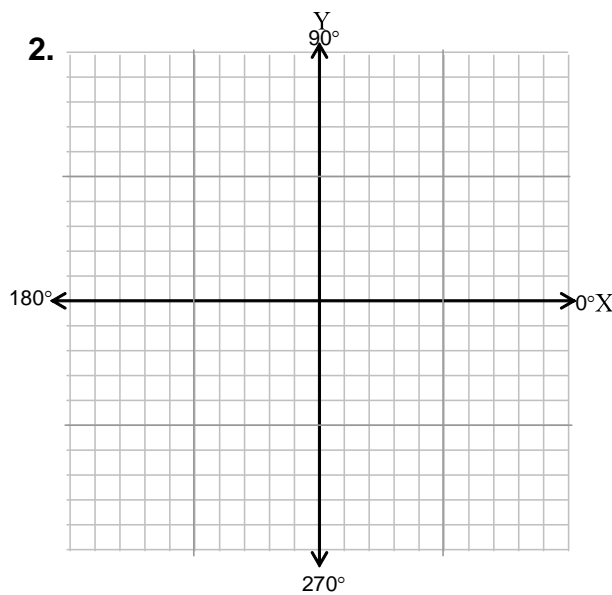
$$\tan\theta = \frac{y}{x}$$

$$\tan\theta = \frac{8}{-6}$$

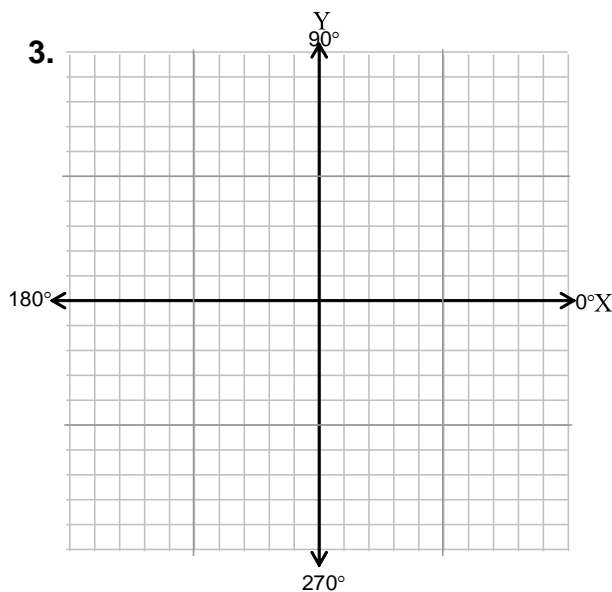
$$\tan\theta = \frac{4}{-3}$$

$$\theta = \sin^{-1}\left(\frac{4}{5}\right) \approx 53^\circ \quad \theta = \cos^{-1}\left(\frac{-3}{5}\right) \approx 127^\circ \quad \theta = \tan^{-1}\left(\frac{4}{-3}\right) \approx 53^\circ$$

$$\text{reference angle is } 53^\circ, \therefore \theta \approx 180 - 53 \approx 127^\circ$$

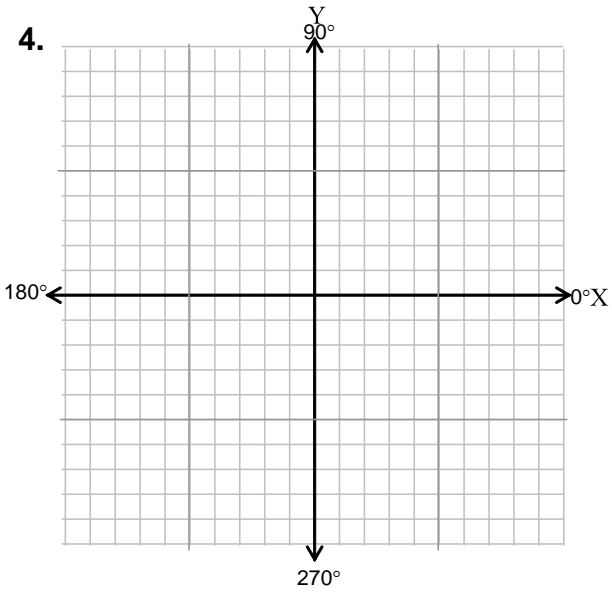


$(-8, -6)$



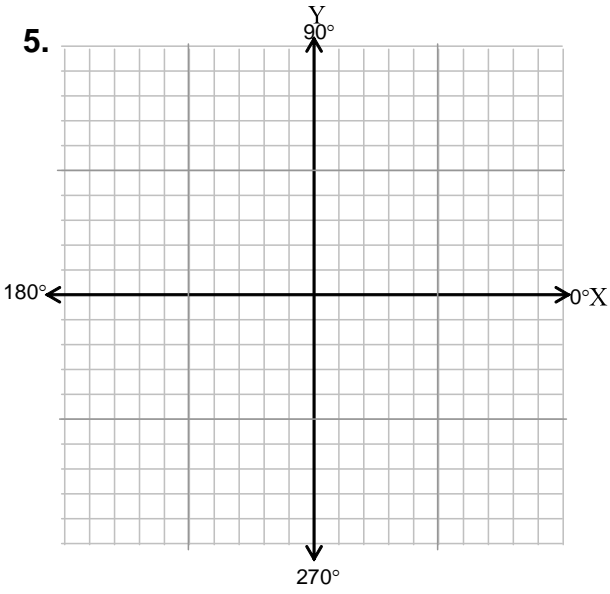
$(7, 7)$

4.



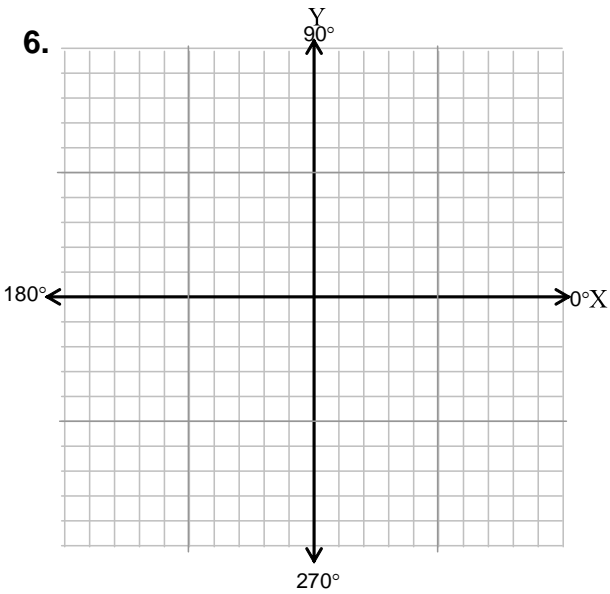
(8, -6)

5.



(-5, -5)

6.



(9, 0)